


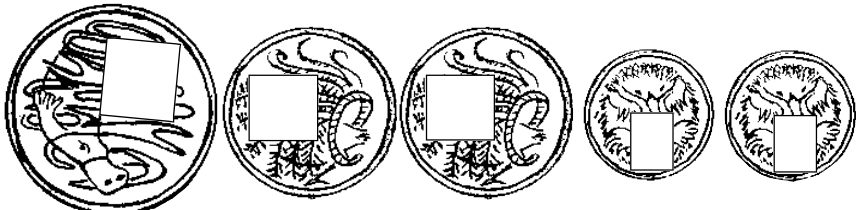
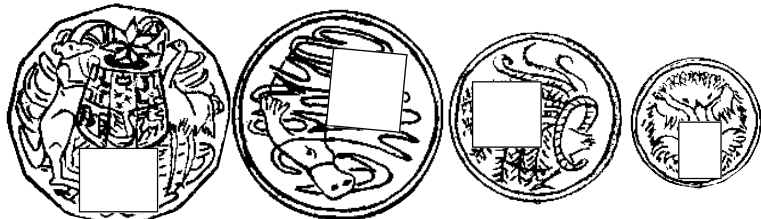
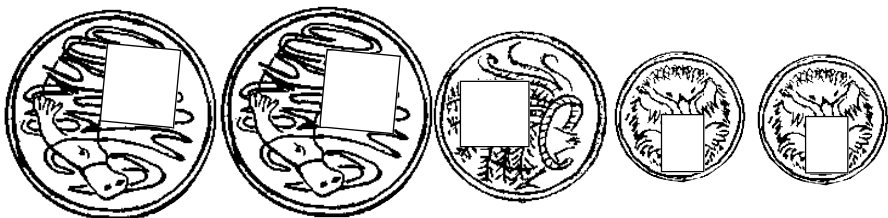



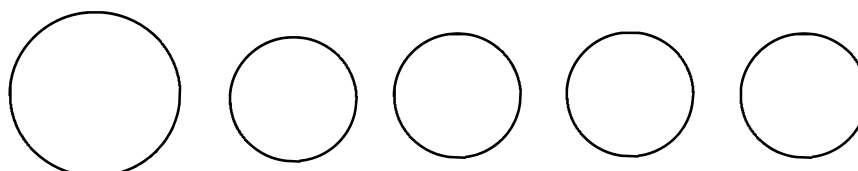

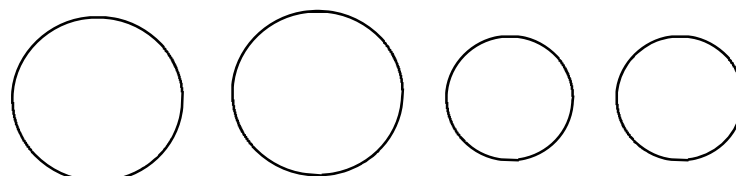
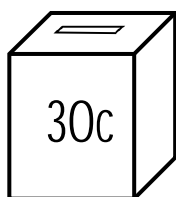


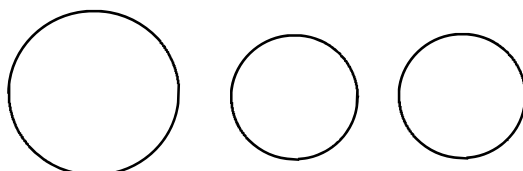

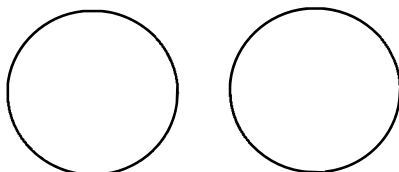

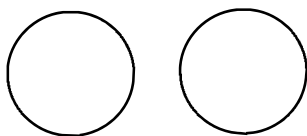

How much?

	<p>Total</p> <p>30c</p>
	<p>25c</p>
	<p>35c</p>
	<p>50c</p>
	<p>85c</p>
	<p>60c</p>
	<p>75c</p>



Use coins to find and write the values on the coins.

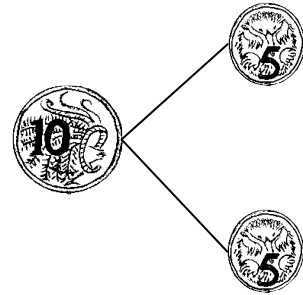
Saving for a Treat



 Use real coins to put the correct value in each coin circle.

Missing Coins

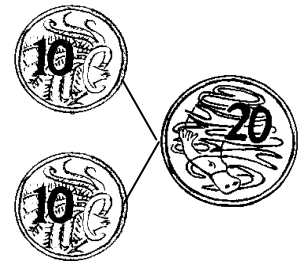
$$10c = \boxed{5c} + \boxed{c}$$



$$20c = \boxed{10c} + \boxed{c}$$

$$20c = \boxed{5c} + \boxed{c} + \boxed{c} + \boxed{c}$$

$$20c = \boxed{10c} + \boxed{c} + \boxed{c}$$



$$30c = \boxed{10c} + \boxed{c} + \boxed{c}$$

$$30c = \boxed{20c} + \boxed{c}$$



$$30c = \boxed{20c} + \boxed{c} + \boxed{c}$$

 Work out and fill in the missing coin values. Look at and use the diagrams.

How much do you have?

$$\begin{array}{c} \text{5c} \\ \hline \end{array} + \begin{array}{c} \text{5c} \\ \hline \end{array} + \begin{array}{c} \text{5c} \\ \hline \end{array} = \underline{\hspace{2cm}} \text{ cents}$$

$$\begin{array}{c} \text{10c} \\ \hline \end{array} + \begin{array}{c} \text{5c} \\ \hline \end{array} + \begin{array}{c} \text{5c} \\ \hline \end{array} = \underline{\hspace{2cm}} \text{ cents}$$

$$\begin{array}{c} \text{5c} \\ \hline \end{array} + \begin{array}{c} \text{5c} \\ \hline \end{array} + \begin{array}{c} \text{10c} \\ \hline \end{array} = \underline{\hspace{2cm}} \text{ cents}$$

$$\begin{array}{c} \text{10c} \\ \hline \end{array} + \begin{array}{c} \text{10c} \\ \hline \end{array} + \begin{array}{c} \text{10c} \\ \hline \end{array} = \underline{\hspace{2cm}} \text{ cents}$$

$$\begin{array}{c} \text{5c} \\ \hline \end{array} + \begin{array}{c} \text{10c} \\ \hline \end{array} + \begin{array}{c} \text{5c} \\ \hline \end{array} = \underline{\hspace{2cm}} \text{ cents}$$

 Start counting from the 10c pieces, then count on the 5c coins.

How much?



_____ C



_____ C



_____ C




_____ C



_____ C



_____ C

 Count on: 50, 60 70.